



S.No	Question	Answer Options	
1	 Identify the shapes in the image provided.	Rectangle	<input type="checkbox"/>
		Square	<input type="checkbox"/>
		Triangle	<input type="checkbox"/>
		Circle	<input type="checkbox"/>
2	 In the image given, count the number of circles.	4	<input type="checkbox"/>
		5	<input type="checkbox"/>
		6	<input type="checkbox"/>
		7	<input type="checkbox"/>

3

Choose the correct option : I have 4 sides and 4 vertices, what am I?

Circle

Square

Triangle

Rectangle


☐
☐
☐
☐

4

Fill in the blanks : A cube has _____ number of faces.

Answer

5



Based on the image provided, choose the correct option : Which object is small?

Ball

Balloon

☐
☐

Correct Answer is

1. Correct Ans option is Rectangle
2. Correct Ans option is 7
3. Correct Ans option is Square
4. Correct Answer is 6
5. Correct Ans option is Ball